



Number Bonds to 10
Complete the number bond sums to 10. Use the space below to show your working out if you need to.

| | |
|--|--|
| $7 + \square = 10$ <input type="text"/> | $2 + \square = 10$ <input type="text"/> |
| $4 + \square = 10$ <input type="text"/> | $8 + \square = 10$ <input type="text"/> |
| $9 + \square = 10$ <input type="text"/> | $3 + \square = 10$ <input type="text"/> |

Number Bonds to 10
Write the number bond sums to 10. Use the space below to show your working out if you need to.

| | |
|--------------------|--------------------|
| $\square = 10$ | $2 + \square = 10$ |
| $6 = 10$ | $\square + 5 = 10$ |
| $7 = 10$ | $8 + \square = 10$ |
| 10 | $\square + 9 = 10$ |
| 10 | $3 + \square = 10$ |
| $\square + 4 = 10$ | |

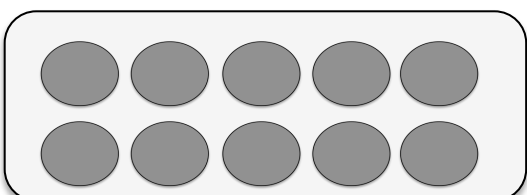
@KutKatResources

Number Bonds to 10
Differentiated

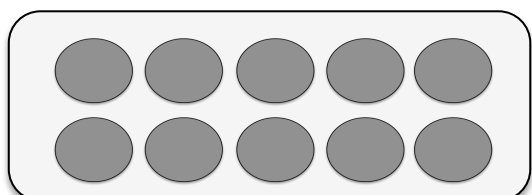
Number Bonds to 10

Complete the number bond sums to 10. Use the circles below the sum to help you solve the following problems.

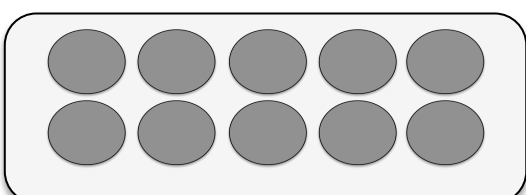
$$7 + \square = 10$$



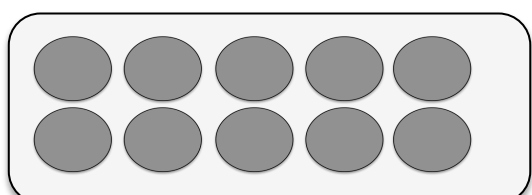
$$2 + \square = 10$$



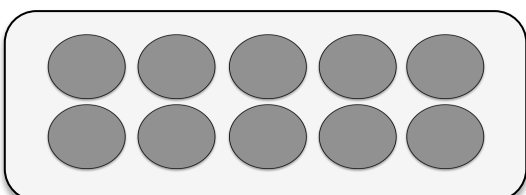
$$4 + \square = 10$$



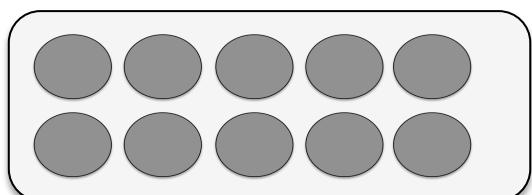
$$8 + \square = 10$$



$$9 + \square = 10$$



$$3 + \square = 10$$



Number Bonds to 10

Complete the number bond sums to 10. Use the space below to show your working out if you need to.

$$7 + \square = 10$$

$$2 + \square = 10$$

$$4 + \square = 10$$

$$8 + \square = 10$$

$$9 + \square = 10$$

$$3 + \square = 10$$

Number Bonds to 10

Complete the number bond sums to 10.
Challenge yourself!

$$7 + \square = 10$$

$$2 + \square = 10$$

$$\square + 6 = 10$$

$$\square + 5 = 10$$

$$4 + \square = 10$$

$$8 + \square = 10$$

$$\square + 3 = 10$$

$$\square + 9 = 10$$

$$9 + \square = 10$$

$$3 + \square = 10$$

$$\square + 8 = 10$$

$$\square + 4 = 10$$

All rights belong to @KatQatResources.

Instagram: katherinemtr

<https://www.teacherspayteachers.com/Store/Katqat-Resources>

Font licence purchased from Kimberly Geiswein fonts.

<https://www.teacherspayteachers.com/Store/Kimberly-Geswein-Fonts>

All content and illustrations author's own.

This may not be reproduced or altered to be sold or distributed in any other way than for personal use in your classroom.

Thank you so much! Enjoy!

